

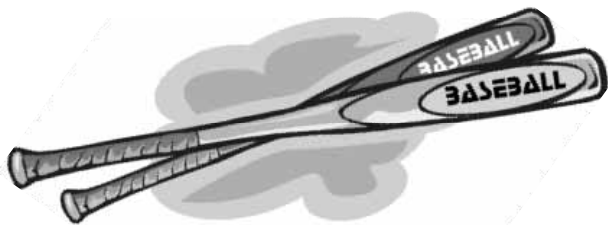


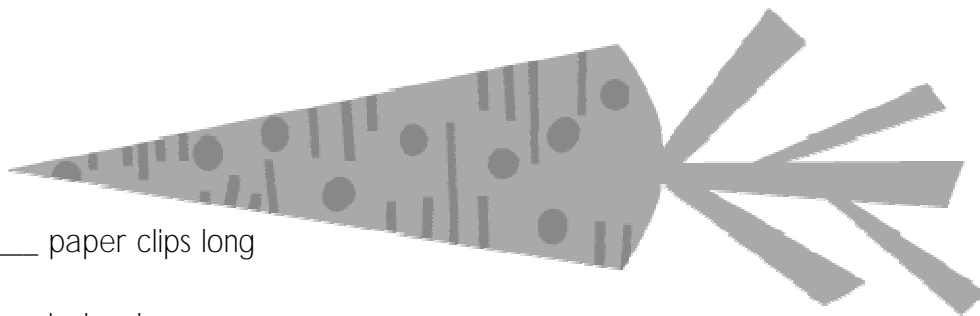
How LONG are these LENGTHS?

1. Use a  to find out how many paper clips long each object is. Write your answer.
2. Use a  to find out how many inches long each object is. Write your answer to the nearest inch.



_____ paper clips long

_____ inches long



_____ paper clips long

_____ inches long



_____ paper clips long

_____ inches long

_____ paper clips long

_____ inches long



_____ paper clips long

_____ inches long

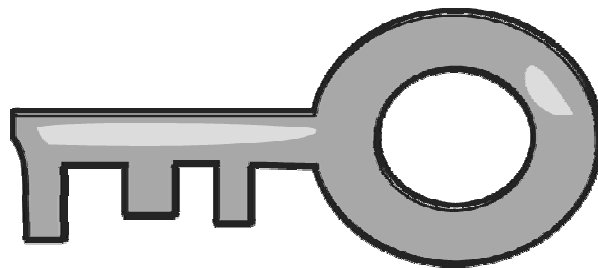


_____ paper clips long

_____ inches long

_____ paper clips long

_____ inches long



Answer Sheet: “How Long Are These Lengths?” (worksheet #2)

(Answers for “paper clips” will vary according to the size of paperclip that was used.)

Baseball bat: 3 inches

Carrot: 5 inches

Ant: 2 inches

Shoe: 4 inches

Bone: 3 inches

Fork: 6 inches

Key: 3 inches