




NAME: _____


How TALL are these TOYS?

1. Use a  to find out how many paper clips tall each toy is. Write your answer.
2. Use a  to find out how many inches tall each toy is. Write your answer to the nearest inch.




_____ paper clips tall

_____ inches tall




_____ paper clips tall

_____ inches tall



_____ paper clips tall

_____ inch tall



_____ paper clips tall

_____ inches tall



_____ paper clips tall

_____ inches tall



_____ paper clips tall

_____ inches tall



_____ paper clips tall

_____ inches tall



_____ paper clips tall

_____ inch tall

Answer Sheet: “How Tall Are These Toys?”

(Answers for “paper clips” will vary according to the size of paperclip that was used.)

Top of the Playground Set: 3 inches

Bicycle: 2 inches

Teddy Bear: 1 inch

Dinosaur: 3 inches

Giraffe: 2 inches

Trampoline: 3 inches

Doll: 2 inches

Truck: 1 inch