


Name: \_\_\_\_\_

# Morning MATH



Complete the following math problems:

---

1. What is the time?



\_\_\_\_\_

2. Name something you would do at this time in the morning:

\_\_\_\_\_

Name something you would do at this time at night:

\_\_\_\_\_

3. Write the time.


Six thirty- \_\_\_\_:\_\_\_\_

Eleven fifteen- \_\_\_\_:\_\_\_\_

Three forty-five- \_\_\_\_:\_\_\_\_

Name: \_\_\_\_\_

# Morning MATH



Complete the following math problems:

---

1. What is the time?



\_\_\_\_\_

2. Name something you would do at this time in the morning:

\_\_\_\_\_

Name something you would do at this time at night:

\_\_\_\_\_

3. Write the time.


Six thirty- \_\_\_\_:\_\_\_\_

Eleven fifteen- \_\_\_\_:\_\_\_\_

Three forty-five- \_\_\_\_:\_\_\_\_

## ANSWER KEY:

# Morning MATH



1. What is the time?



10:30

2. Name something you would do at this time in the morning:

answers will vary

Name something you would do at this time at night:

answers will vary

3. Write the time.

Six thirty- 6:30

Eleven fifteen- 11:15

Three forty-five- 3:45