



# Math Worksheet: Multiplication Grid

Calculate the product.




$6 \times 6 = \underline{\quad}$




$3 \times 4 = \underline{\quad}$



$4 \times 5 = \underline{\quad}$




$2 \times 2 = \underline{\quad}$




$5 \times 6 = \underline{\quad}$

# Answers for Math Worksheet: Multiplication Grid




$$6 \times 6 = 36$$




$$3 \times 4 = 12$$



$$4 \times 5 = 20$$



$$2 \times 2 = 4$$



$$5 \times 6 = 30$$