


Name:

Morning MATH



Complete the following
math problems:

1.

$$\begin{array}{r} 19 \\ \times 3 \\ \hline \end{array}$$

2.

$$\begin{array}{r} 33 \\ \times 7 \\ \hline \end{array}$$

3.


$$\begin{array}{r} 42 \\ \times 6 \\ \hline \end{array}$$

4.

$$\begin{array}{r} 25 \\ \times 5 \\ \hline \end{array}$$

Name:

Morning MATH



Complete the following
math problems:

1.

$$\begin{array}{r} 19 \\ \times 3 \\ \hline \end{array}$$

2.

$$\begin{array}{r} 33 \\ \times 7 \\ \hline \end{array}$$

3.


$$\begin{array}{r} 42 \\ \times 6 \\ \hline \end{array}$$

4.

$$\begin{array}{r} 25 \\ \times 5 \\ \hline \end{array}$$

Name: *Answer Key*

Morning MATH



Complete the following
math problems:

1.

$$\begin{array}{r} 19 \\ \times 3 \\ \hline \end{array}$$

57

2.

$$\begin{array}{r} 33 \\ \times 7 \\ \hline \end{array}$$

231

3.

$$\begin{array}{r} 42 \\ \times 6 \\ \hline \end{array}$$

252

4.

$$\begin{array}{r} 25 \\ \times 5 \\ \hline \end{array}$$

125