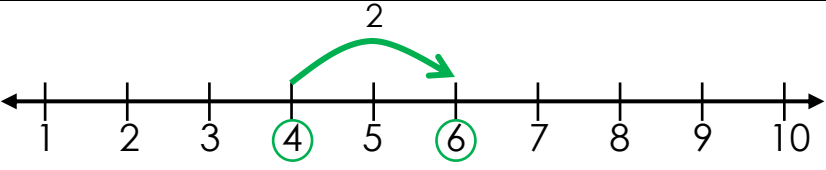
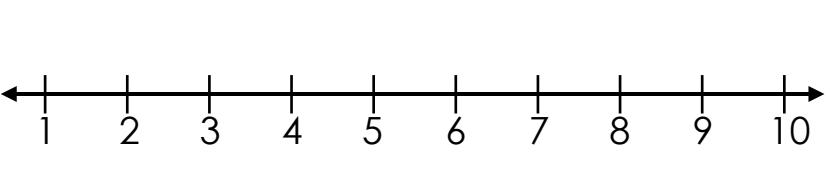
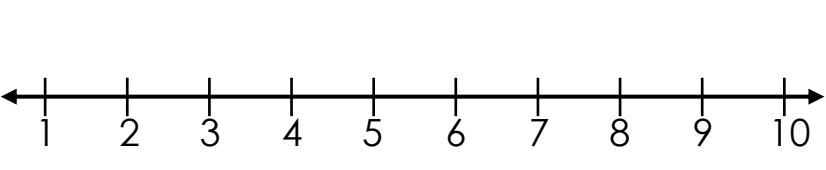
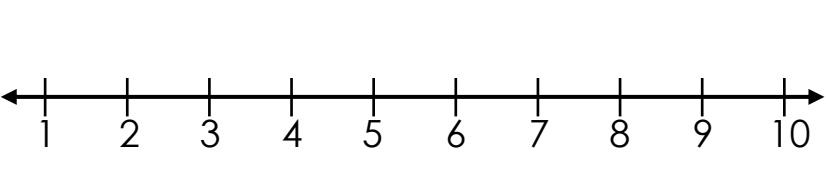
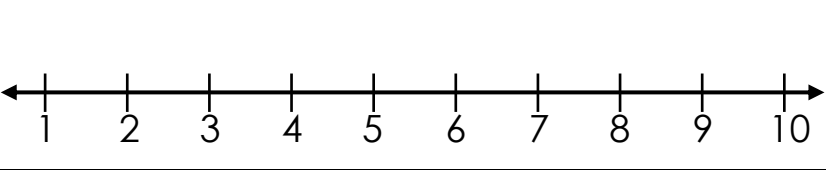
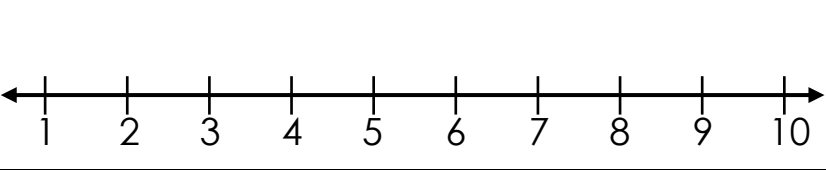
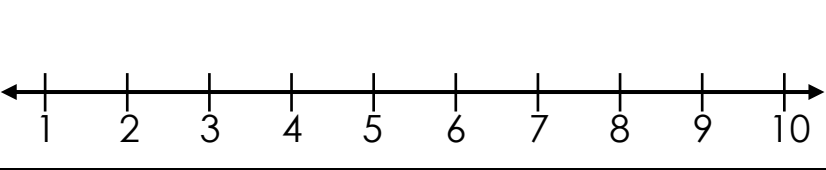
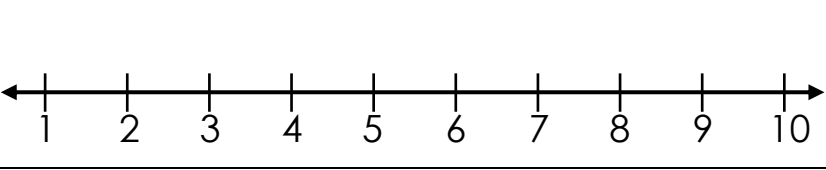
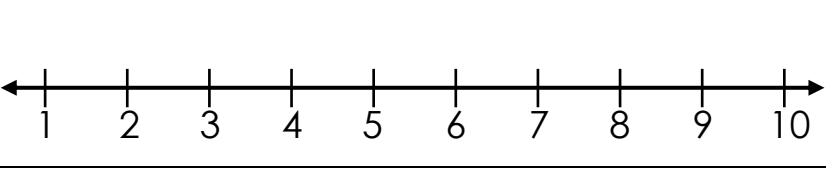
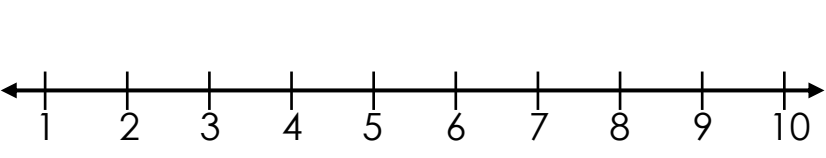
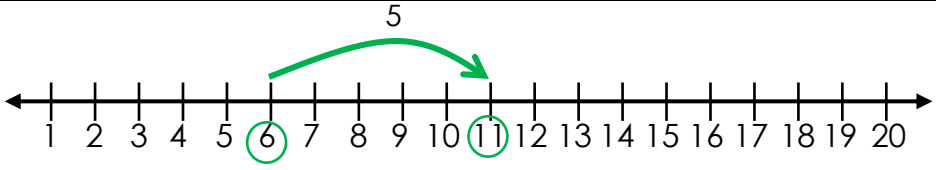
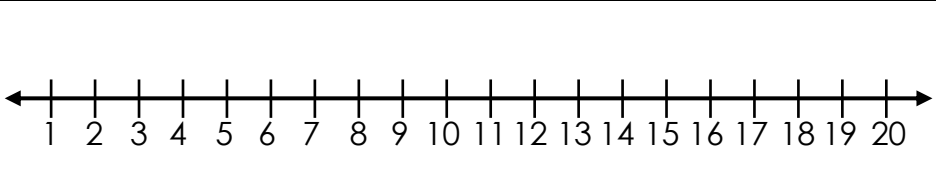
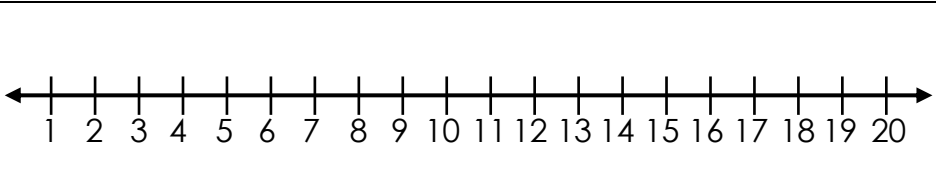
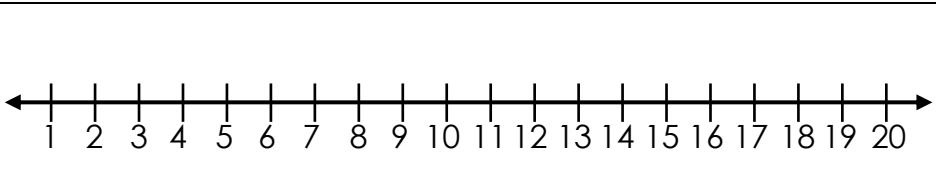
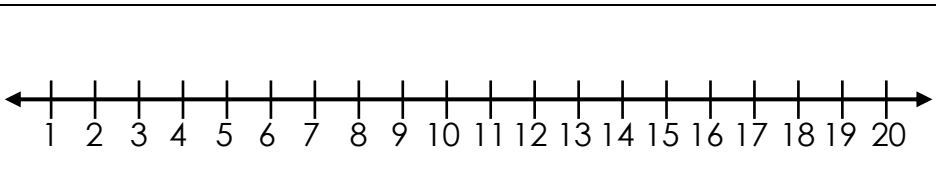
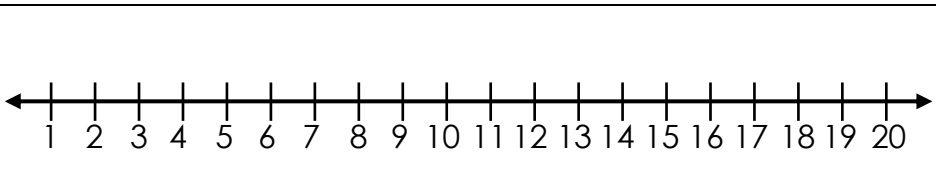
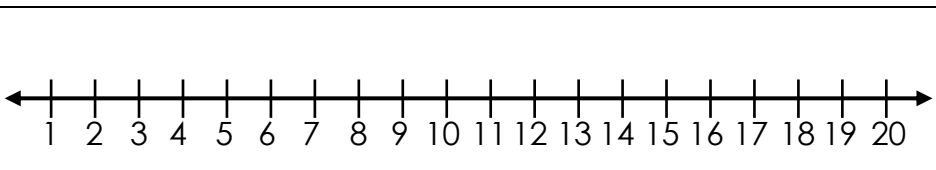
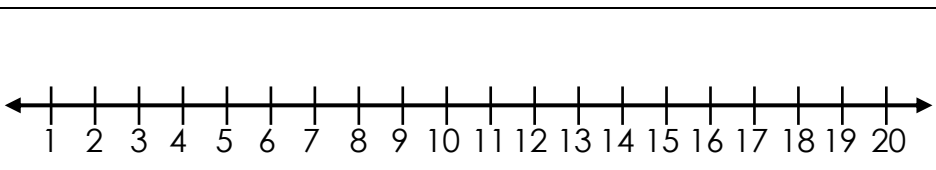
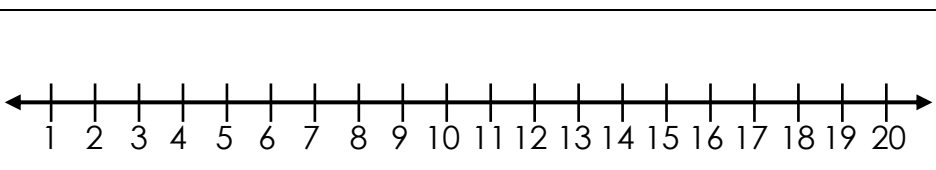
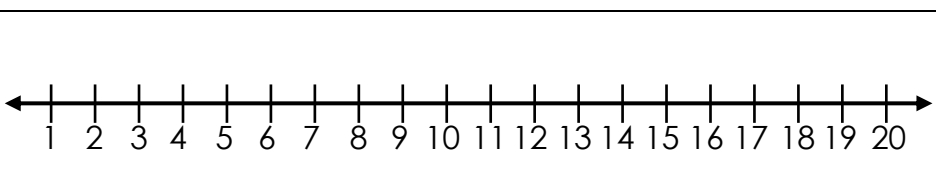


# Number Line Addition

$4 + 2 =$	
$2 + 1 =$	
$3 + 2 =$	
$3 + 4 =$	
$7 + 1 =$	
$1 + 9 =$	
$6 + 3 =$	
$2 + 8 =$	
$2 + 2 =$	
$5 + 3 =$	

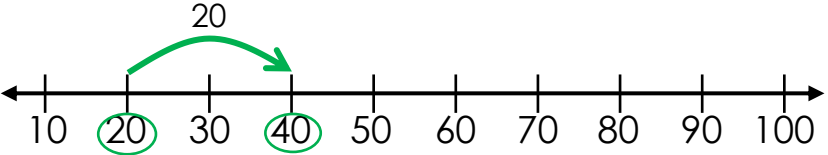
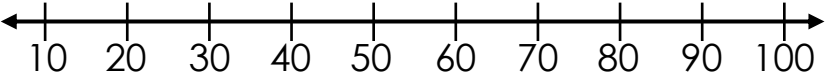
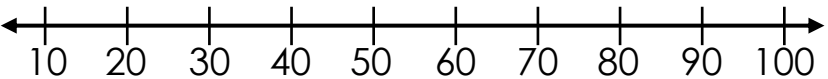
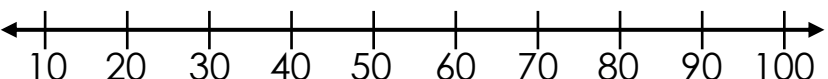
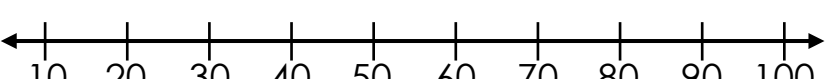
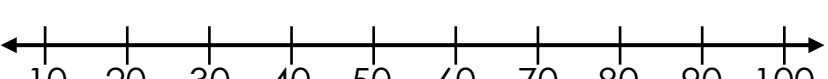
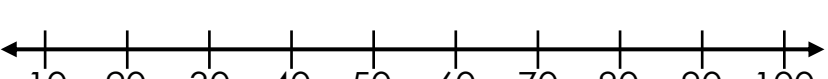
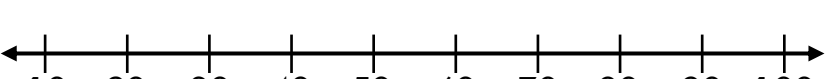

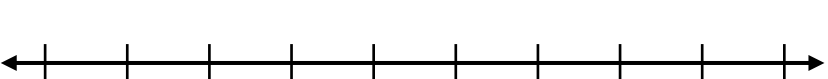
# Number Line Addition

$6 + 5 =$	
$9 + 3 =$	
$7 + 2 =$	
$8 + 6 =$	
$10 + 2 =$	
$3 + 7 =$	
$9 + 6 =$	
$5 + 8 =$	
$4 + 7 =$	
$10 + 9 =$	

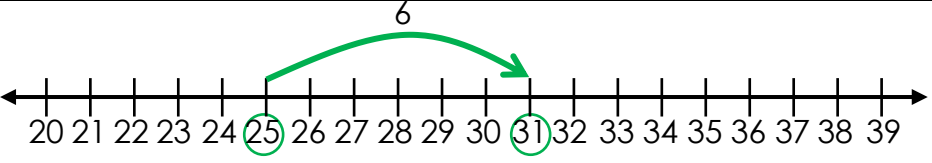
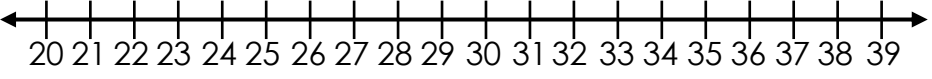
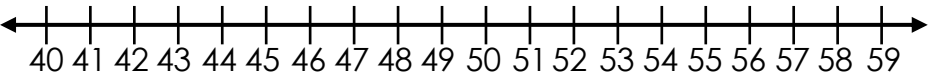
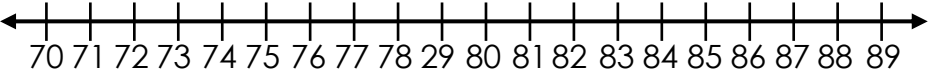
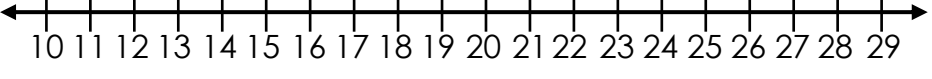
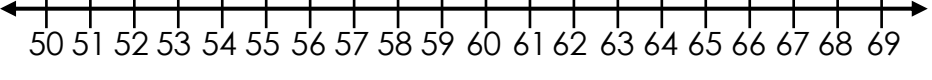
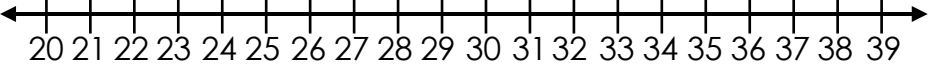
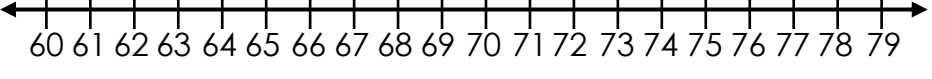
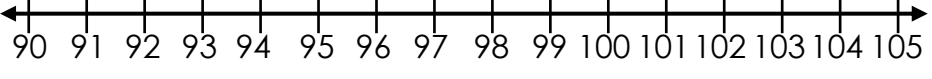
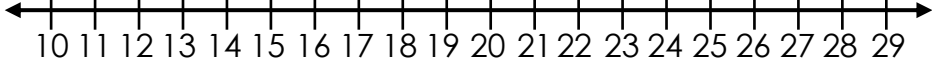
# Number Line Addition

$12 + 6 =$	<p>A number line from 1 to 20. The number 12 is circled in green. A green arrow starts at 12 and points to 18. The number 6 is written above the arrow.</p>
$14 + 5 =$	<p>A number line from 1 to 20.</p>
$11 + 3 =$	<p>A number line from 1 to 20.</p>
$15 + 2 =$	<p>A number line from 1 to 20.</p>
$13 + 5 =$	<p>A number line from 1 to 20.</p>
$16 + 1 =$	<p>A number line from 1 to 20.</p>
$18 + 2 =$	<p>A number line from 1 to 20.</p>
$10 + 5 =$	<p>A number line from 1 to 20.</p>
$12 + 7 =$	<p>A number line from 1 to 20.</p>
$11 + 4 =$	<p>A number line from 1 to 20.</p>

# Number Line Addition

$20 + 20 =$	 <p>A number line from 10 to 100 with tick marks every 10 units. The numbers 20 and 40 are circled in green. A green curved arrow starts at 20 and points to 40, with the number 20 written above it.</p>
$40 + 10 =$	 <p>A number line from 10 to 100 with tick marks every 10 units.</p>
$60 + 20 =$	 <p>A number line from 10 to 100 with tick marks every 10 units.</p>
$50 + 20 =$	 <p>A number line from 10 to 100 with tick marks every 10 units.</p>
$10 + 70 =$	 <p>A number line from 10 to 100 with tick marks every 10 units.</p>
$30 + 10 =$	 <p>A number line from 10 to 100 with tick marks every 10 units.</p>
$80 + 20 =$	 <p>A number line from 10 to 100 with tick marks every 10 units.</p>
$50 + 30 =$	 <p>A number line from 10 to 100 with tick marks every 10 units.</p>
$20 + 70 =$	 <p>A number line from 10 to 100 with tick marks every 10 units.</p>
$10 + 80 =$	 <p>A number line from 10 to 100 with tick marks every 10 units.</p>

# Number Line Addition

$25 + 6 =$	
$30 + 5 =$	
$46 + 10 =$	
$74 + 8 =$	
$18 + 7 =$	
$54 + 6 =$	
$22 + 9 =$	
$68 + 5 =$	
$92 + 8 =$	
$14 + 12 =$	

## Number Line Addition - Answers

page 1:	page 2:	page 3:	page 4:	page 5:
6	11	18	40	31
3	12	19	50	35
5	9	14	80	56
7	14	17	70	82
8	12	18	80	25
10	10	17	40	60
9	15	20	100	31
10	13	15	80	73
4	11	19	90	100
8	19	15	90	26