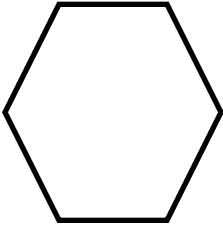


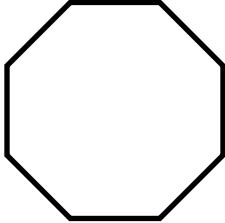
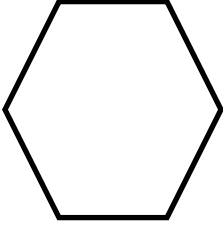




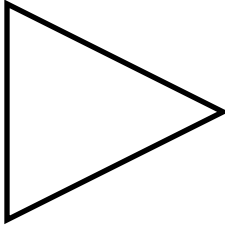


Name: \_\_\_\_\_

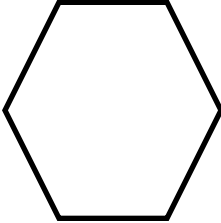


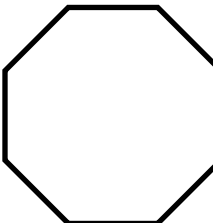
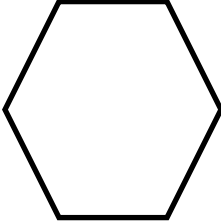




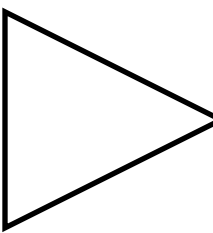
Date: \_\_\_\_\_

### Classify Polygons

Circle the shape name, and write the number of sides.

 <p>Rectangle Pentagon Square Hexagon</p> <p>Number of Sides: _____</p>	 <p>Rectangle Square Star Pentagon</p> <p>Number of Sides: _____</p>
 <p>Star Pentagon Triangle Square</p> <p>Number of Sides: _____</p>	 <p>Octagon Hexagon Star Square</p> <p>Number of Sides: _____</p>
 <p>Triangle Hexagon Star Rectangle</p> <p>Number of Sides: _____</p>	 <p>Pentagon Star Square Octagon</p> <p>Number of Sides: _____</p>
 <p>Square Hexagon Triangle Octagon</p> <p>Number of Sides: _____</p>	 <p>Hexagon Rectangle Square Octagon</p> <p>Number of Sides: _____</p>
 <p>Star Octagon Hexagon Square</p> <p>Number of Sides: _____</p>	 <p>Triangle Rectangle Square Pentagon</p> <p>Number of Sides: _____</p>

## Answers for Classify Polygons

 <p style="text-align: center;">           Rectangle            Pentagon            Square  <span style="border: 1px solid green; border-radius: 50%; padding: 2px;">Hexagon</span> </p> <p>Number of Sides: <u>  6  </u></p>	 <p style="text-align: center;"> <span style="border: 1px solid green; border-radius: 50%; padding: 2px;">Rectangle</span>            Square            Star            Pentagon         </p> <p>Number of Sides: <u>  4  </u></p>
 <p style="text-align: center;"> <span style="border: 1px solid green; border-radius: 50%; padding: 2px;">Star</span>            Pentagon            Triangle            Square         </p> <p>Number of Sides: <u> 10 </u></p>	 <p style="text-align: center;"> <span style="border: 1px solid green; border-radius: 50%; padding: 2px;">Octagon</span>            Hexagon            Star            Square         </p> <p>Number of Sides: <u>  8  </u></p>
 <p style="text-align: center;">           Triangle  <span style="border: 1px solid green; border-radius: 50%; padding: 2px;">Hexagon</span>            Star            Rectangle         </p> <p>Number of Sides: <u>  6  </u></p>	 <p style="text-align: center;">           Pentagon            Star  <span style="border: 1px solid green; border-radius: 50%; padding: 2px;">Square</span>            Octagon         </p> <p>Number of Sides: <u>  4  </u></p>
 <p style="text-align: center;">           Square            Hexagon  <span style="border: 1px solid green; border-radius: 50%; padding: 2px;">Triangle</span>            Octagon         </p> <p>Number of Sides: <u>  3  </u></p>	 <p style="text-align: center;">           Hexagon  <span style="border: 1px solid green; border-radius: 50%; padding: 2px;">Rectangle</span>            Square            Octagon         </p> <p>Number of Sides: <u>  4  </u></p>
 <p style="text-align: center;"> <span style="border: 1px solid green; border-radius: 50%; padding: 2px;">Star</span>            Octagon            Hexagon            Square         </p> <p>Number of Sides: <u> 10 </u></p>	 <p style="text-align: center;"> <span style="border: 1px solid green; border-radius: 50%; padding: 2px;">Triangle</span>            Rectangle            Square            Pentagon         </p> <p>Number of Sides: <u>  3  </u></p>