


Name: _____


Date: _____

Division Grid


Calculate the quotient.




$4 \div 2 = \underline{\quad}$




$25 \div 5 = \underline{\quad}$




$6 \div 3 = \underline{\quad}$




$16 \div 4 = \underline{\quad}$



$36 \div 6 = \underline{\quad}$



$15 \div 5 = \underline{\quad}$




$25 \div 5 = \underline{\quad}$




$24 \div 6 = \underline{\quad}$

Answers for Division Grid




$4 \div 2 = 2$




$25 \div 5 = 5$




$6 \div 3 = 2$




$16 \div 4 = 4$



$36 \div 6 = 6$



$15 \div 5 = 3$



$25 \div 5 = 5$



$24 \div 6 = 4$