


Name: \_\_\_\_\_


Date: \_\_\_\_\_

### Multiplication Grid


Calculate the product.




$3 \times 6 = \underline{\quad}$



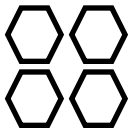
$6 \times 6 = \underline{\quad}$



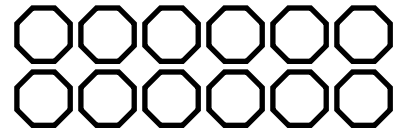
$5 \times 6 = \underline{\quad}$




$2 \times 3 = \underline{\quad}$




$2 \times 2 = \underline{\quad}$




$2 \times 6 = \underline{\quad}$




$2 \times 5 = \underline{\quad}$



$2 \times 2 = \underline{\quad}$




$3 \times 4 = \underline{\quad}$




$2 \times 6 = \underline{\quad}$


# Answers for Multiplication Grid




$3 \times 6 = 18$



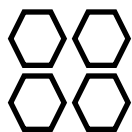
$6 \times 6 = 36$




$5 \times 6 = 30$




$2 \times 3 = 6$




$2 \times 2 = 4$




$2 \times 6 = 12$




$2 \times 5 = 10$



$2 \times 2 = 4$



$3 \times 4 = 12$



$2 \times 6 = 12$